

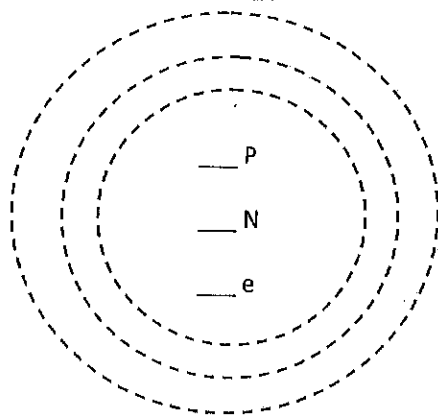
Biology IA
 Chapter 2 Inorganic
 Atomic structure worksheet

Use the periodic table to fill in the number of each subatomic particle in the uncharged atoms given:

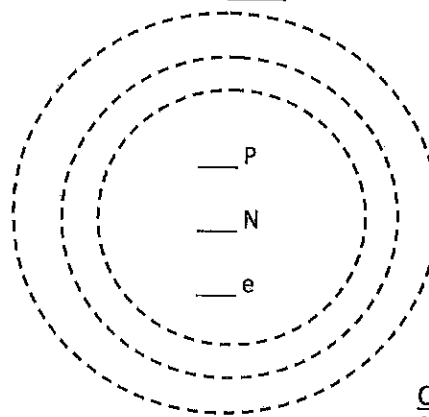
Atom	# Protons	# Neutrons	# Electrons
Oxygen			
Nitrogen			
Carbon			
Fluorine			
Hydrogen			
Iron			
Sodium			
Magnesium			
Uranium			

For each of the following atoms, indicate number of protons, neutrons and electrons and show the distribution of electrons in the energy orbitals.

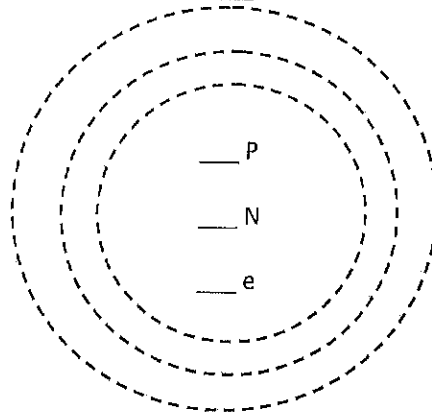
Lithium



Chlorine



Sulfur



Carbon

